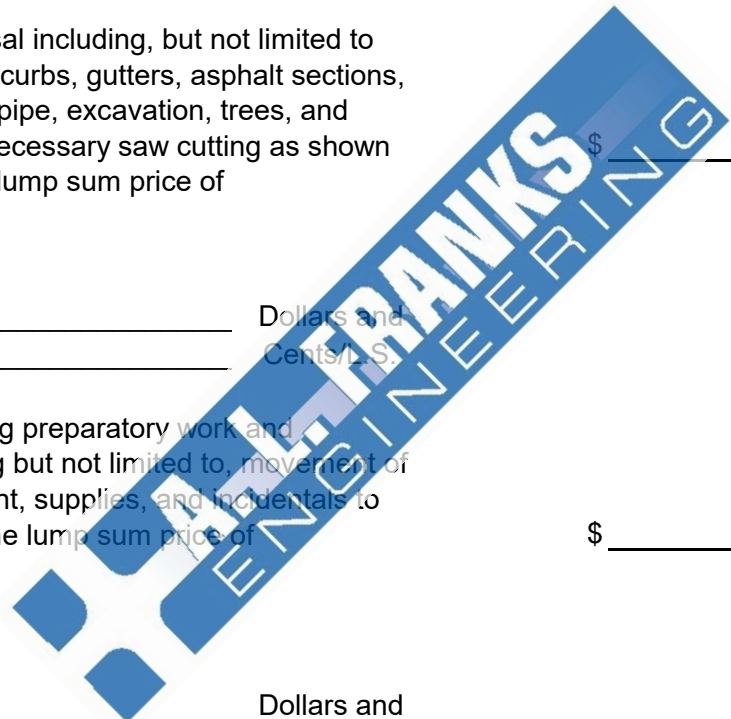


**SMACKOVER-NORPHLET SCHOOL DISTRICT
SNSD SIDEWALK IMPROVEMENTS**

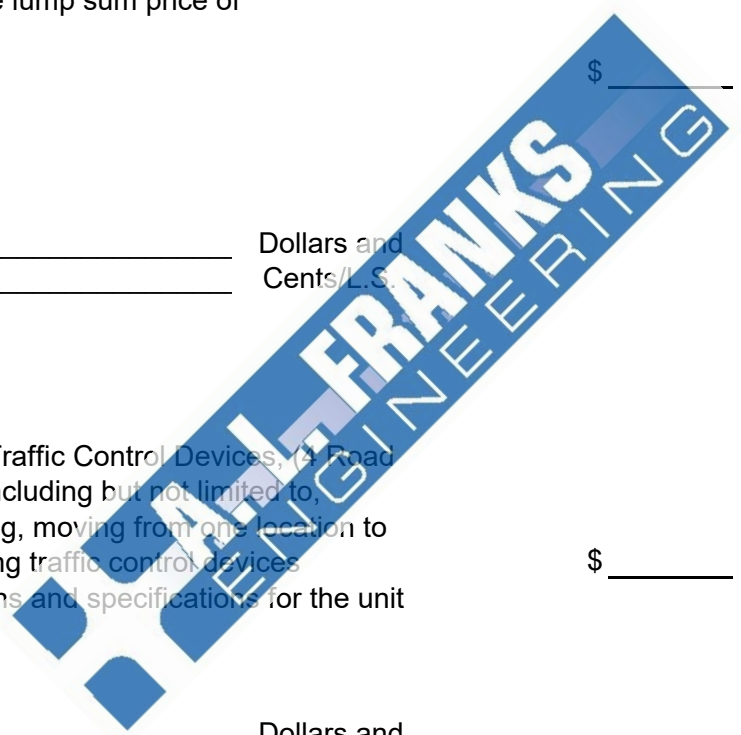
BID PROPOSAL

ITEM	QTY	UNIT	DESCRIPTION	UNIT PRICE	TOTAL PRICE
1	1	L.S.	Removal and disposal including, but not limited to concrete sidewalks, curbs, gutters, asphalt sections, retaining wall, drain pipe, excavation, trees, and brush including all necessary saw cutting as shown on the plans for the lump sum price of _____ Dollars and _____ Cents/L.S.	\$ _____	\$ _____
2	1	L.S.	Mobilization including preparatory work and operations, including but not limited to, movement of personnel, equipment, supplies, and incidentals to the project site for the lump sum price of _____ Dollars and _____ Cents/L.S.	\$ _____	\$ _____



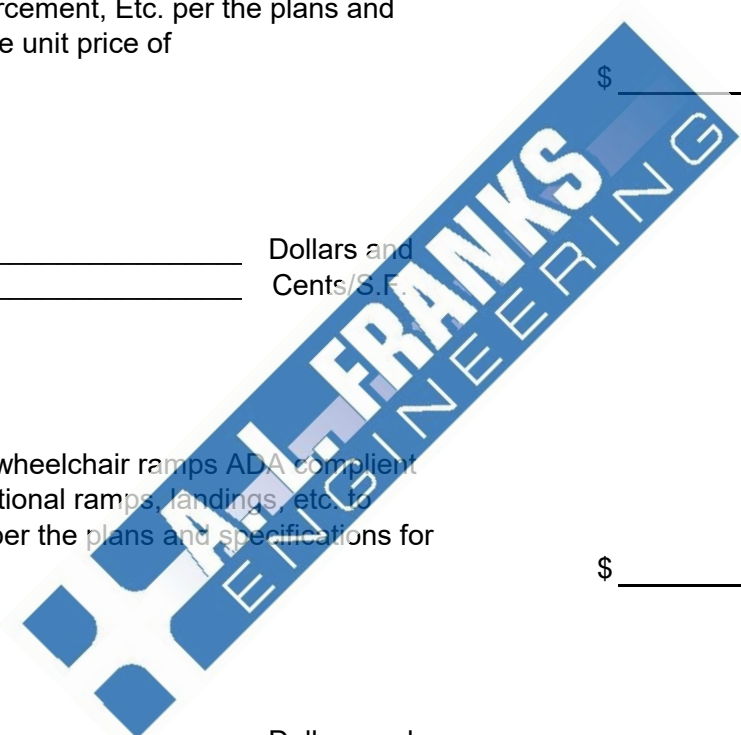
BID PROPOSAL CONTINUED

ITEM	QTY	UNIT	DESCRIPTION	UNIT PRICE	TOTAL PRICE
3	1	L.S.	Maintenance of Traffic per the plans and specifications for the lump sum price of _____ Dollars and _____ Cents/L.S.	\$ _____	\$ _____
4	64	S.F.	Furnish and Install Traffic Control Devices, (4 Road Work Signs Total) including but not limited to, installing, maintaining, moving from one location to another and removing traffic control devices according to the plans and specifications for the unit price of _____ Dollars and _____ Cents/S.F.	\$ _____	\$ _____



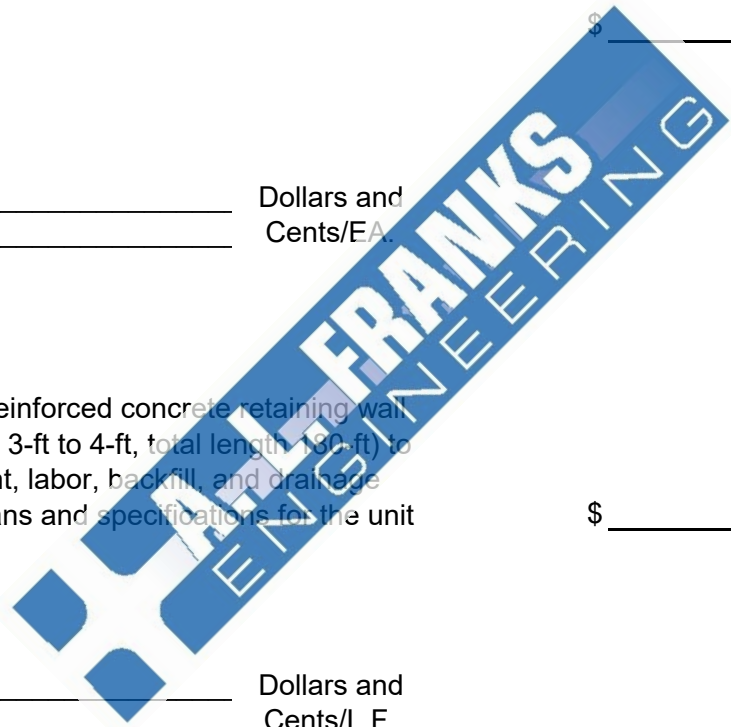
BID PROPOSAL CONTINUED

ITEM	QTY	UNIT	DESCRIPTION	UNIT PRICE	TOTAL PRICE
5	3,100	S.F.	Concrete flatwork 4" thick including any grading, paving sand, reinforcement, Etc. per the plans and specifications for the unit price of	\$ _____	\$ _____
			_____ Dollars and _____ Cents/S.F.		
6	1	EA.	Furnish and install wheelchair ramps ADA compliant including any transitional ramps, landings, etc. to have a legal ramp per the plans and specifications for the unit price of	\$ _____	\$ _____
			_____ Dollars and _____ Cents/EA.		



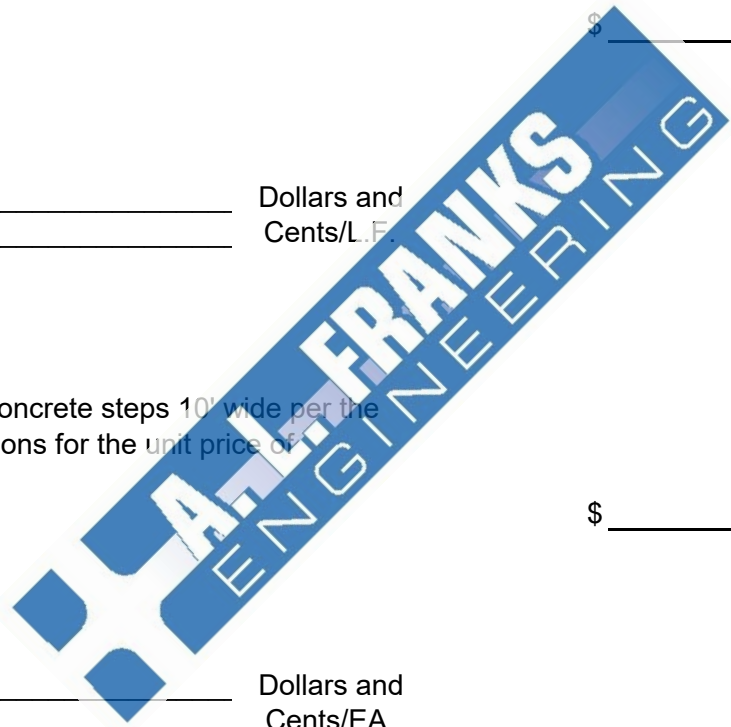
BID PROPOSAL CONTINUED

ITEM	QTY	UNIT	DESCRIPTION	UNIT PRICE	TOTAL PRICE
7	4	EA.	Diamond Plate Steel for sidewalk drains to be bolted per the plans and specifications for the unit price of	\$ _____	\$ _____
			_____ Dollars and Cents/EA.		
8	180	L.F.	Furnish and Install reinforced concrete retaining wall (typical height range 3-ft to 4-ft, total length 180-ft) to include all equipment, labor, backfill, and drainage materials per the plans and specifications for the unit price of	\$ _____	\$ _____
			_____ Dollars and Cents/L.F.		



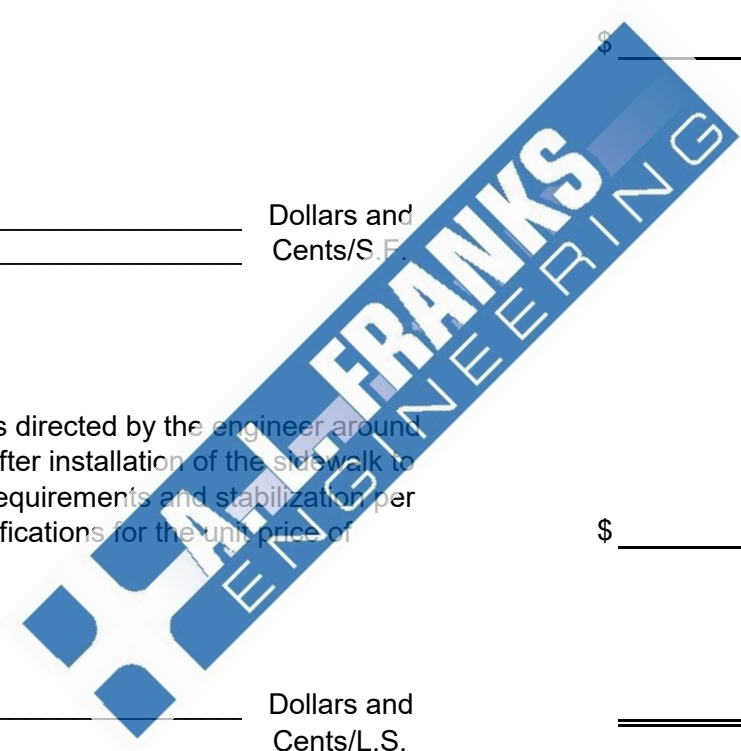
BID PROPOSAL CONTINUED

ITEM	QTY	UNIT	DESCRIPTION	UNIT PRICE	TOTAL PRICE
9	180	L.F.	Handrail per the plans and specifications for the unit price of	\$ _____	\$ _____
			_____ Dollars and Cents/L.F.		
10	2	EA.	Furnish and install concrete steps 10' wide per the plans and specifications for the unit price of	\$ _____	\$ _____
			_____ Dollars and Cents/EA.		



BID PROPOSAL CONTINUED

ITEM	QTY	UNIT	DESCRIPTION	UNIT PRICE	TOTAL PRICE
11	2,500	S.F.	Grade and Seed sidewalk area per the plans and specifications for the unit price of	\$ _____	\$ _____
			_____ Dollars and _____ Cents/S.F.		
12	1	L.S.	Grade and cut/fill as directed by the engineer around the sidewalk area after installation of the sidewalk to achieve 3:1 slope requirements and stabilization per the plans and specifications for the unit price of	\$ _____	\$ _____
			_____ Dollars and _____ Cents/L.S.	_____	_____
TOTAL BASE BID OF ITEMS 1-12				\$ _____	



BID PROPOSAL CONTINUED

NOTES

- 1) Submission of the completed Bid Proposal is considered evidence to the Owner that the Contractor fully and clearly understands the complete scope of work and all actions and materials required to complete the work.
- 2) Items required but not specifically called out in the Bid Proposal shall be included in other items.
- 3) Time required to complete base bid work shall be 120 calendar days.

